



Answer the below Questions

½ Mark Questions

1. Based on the relationship between the information in the first pair, complete the second pair related to Location of India.
Latitudes : Northern Hemisphere :: Longitudes : ?
2. Based on the relationship between the information in the first pair, complete the second pair.
IST : 82 ½ East longitude :: GMT : ?
3. Which of the following place gets sunrise first?
Bhopal, Jaipur, Calcutta, Bhubaneswar,
4. Find out the odd one.
Pakistan, Bhutan, Srilanka, Bangladesh
5. When was formation of Himalayas took place?
6. Based on the relationship between the information in the first pair, complete the second pair.
Himadri : Grater Himalayas :: Himachal : ?
7. Which plateau in India rich in minerals?
8. The southern boundary of peninsular plateau?
9. Based on the relationship between the information in the first pair, complete the second pair.
Western Ghats: Annaimudi :: Eastern Ghats : ?
10. Which is the longest canal in India? Write length.
11. Based on the relationship between the information in the first pair, complete the second pair.
Mishmi hills : Arunachal Pradesh :: Cachar : ?
12. Dihang valley located in which state?

1 Mark Questions

13. What is the Dun? Give examples.
14. Write the two parts of the peninsular plateau.
15. Name the lakes in the east coast of India.
16. What are the coral reefs?
17. What is Leeward?
18. What are the coastal plains?
19. What is purvanchal?
20. Name the Island groups in India?



Answer the following questions

2 Mark Questions

3. Write about Laurasia, Angaraland and Gondwana land.
4. Write the location of Andhra Pradesh.
5. Why do we often use the term “Indian peninsula”?
6. If India is located in Arctic Circle. How your life would be different?
7. What are the major relief divisions in India?
8. Make table with states and their coastal lines.
9. Write about different Himalayan ranges?
10. Name the tributaries of Indus.

4 Mark Questions

1. Explain different geographical features in the Indo-Gangetic plains?
2. Which are the major physiographic divisions of India? Contrast the relief of the Himalayan region with that of the peninsular plateau.



www.digitalsocialteacher.in



India - Relief Features

CHAPTER

1

WORK SHEET-3

Location of India, IST

Point out the following points in India map



1. The north most latitude in degrees (37 degrees 6 min. north latitude)
2. The south most latitude in degrees (8 degrees 4 min. north latitude)
3. The east most longitude in degrees (97 degrees 25 min. east longitude)
4. The west most longitude in degrees (68 degrees 7 min. east longitude)
5. Indian Standard Meridian (82 degrees 30 min. East longitude)
6. The city which is passes Indian standard meridian(Alahabad)
7. The State where sunrise first(Arunachalpradesh)
8. The State where sunrise last(Gujarat)
9. The prime latitude which is passes through India (Tropic of cancer-23 degrees 30 min. North latitude)



www.digitalsocialteacher.in



India - Relief Features

CHAPTER 1

WORK SHEET-3

Tropic of Cancer, Indianan Standard Meridian – States

Point out the following states in India map



Tropic of Cancer Passing States

10. Gujarat
11. Rajasthan
12. Madhya Pradesh
13. Chhattisgarh
14. Jharkhand
15. West Bengal
16. Tripura
17. Mizoram

Indian Standard Meridian Passing States

18. Uttara Pradesh
19. Madhya Pradesh
20. Chhattisgarh
21. Odisha
22. Andhra Pradesh



Point out the following points in India map



23. The Eastern boundary of India (Bay of Bengal)
24. The Western boundary of India(Arabian sea)
25. The northern boundary of India(Himalayas)
26. The southern boundary of India(Indian ocean)
27. The south most point of India main land (Kanyakumari)
28. The south most point of India (Indirapoint)
29. The north most point of India (Kilk Dawan Pass / Indira Coal)
30. The East most point of India (Purvanchal range)
31. The West most point of India (Ran-off-kuch)



Point out the following Union Territories in India map



32. Jammu & Kashmir
33. Ladakh
34. National Capital Territorial (New Delhi)
35. Chandigarh
36. Pondicherry
37. Daman & Diu, Dadra and Nagar Haveli
38. The Islands formed due to volcanic eruption (Andaman Nicobar Islands)
39. Coral Islands (Lakshadweep)



www.digitalsocialteacher.in



India - Relief Features

WORK SHEET-5

NIGHBOURHOOD COUNTRIES OF INDIA

Point out the following points in India map



41. Pakistan
42. Afghanistan
43. China
44. Nepal
45. Bhutan
46. Myanmar
47. Bangladesh
48. The nearest country of India in water (Sri Lanka)
49. The nearest country to Lakshadweep (Maldives)
50. The strait separating Srilanka from India (Palk strait)
51. The gulf between Srilanka and India (Gulf of Manner)



WORK SHEET-5

MAJOR RELIEF DIVISIONS OF INDIA

Point out the following relief divisions of in India map



- 52. Himalayas
- 53. Indo- Gangetic plains
- 54. Peninsular plateau
- 55. Thar desert
- 56. Islands (Andaman nicobar , Lakshadweep)
- 57. Coastal plains (Eastern coastal plains, Western Coastal plains)



www.digitalsocialteacher.in



India - Relief Features

CHAPTER 1

WORK SHEET-6

Himalayas

Point out the following points in India map



58. Himadri (Higher Himalayas) – The North most range of Himalayas
59. Himachal (Lesser Himalayas)
60. Siwaliks (Outer Himalayas) – The south most range of Himalayas
61. Purvanchal (The eastern part of Himalayas)
62. The Highest peak in Himalayas (Mt Everest)
63. The Highest peak in India (K2)
64. The mountain range where K2 peak situated (Karakoram Range)
65. The Zaskar range
66. Kanchenjunga
67. Nanga Parbat



www.digitalsocialteacher.in



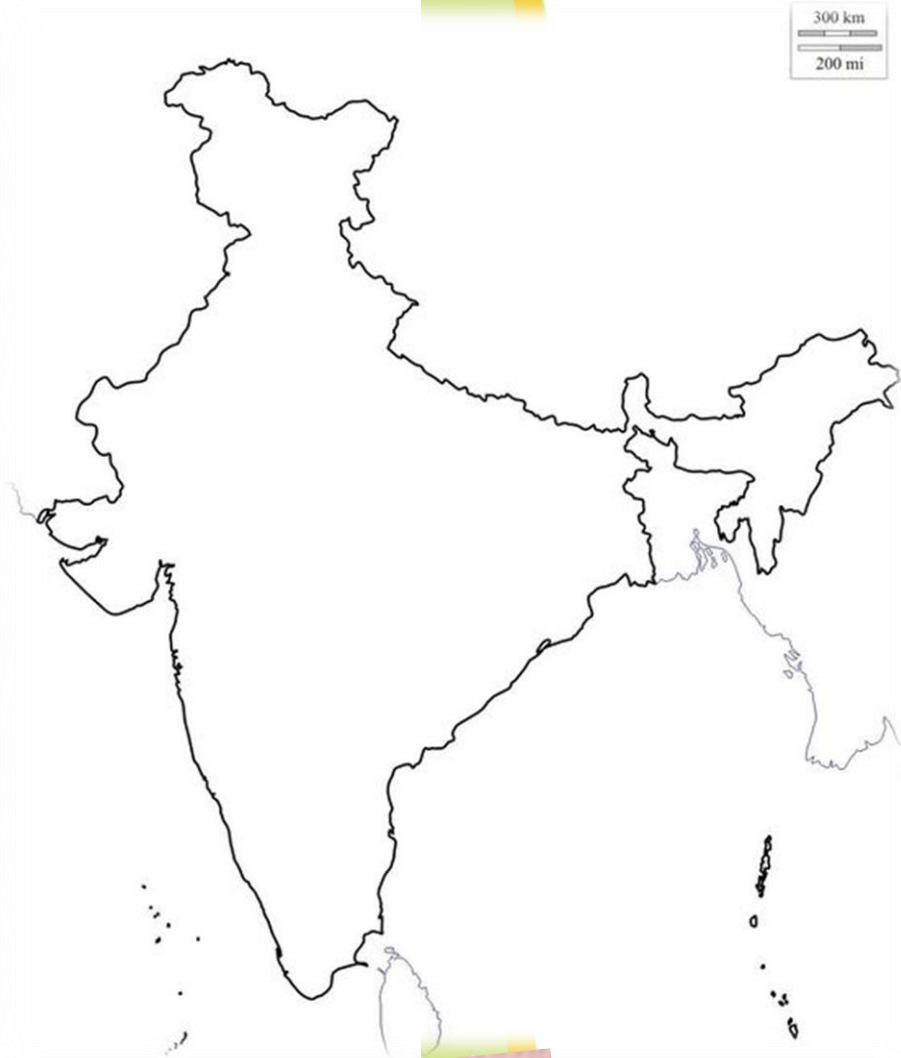
India - Relief Features

CHAPTER 1

WORK SHEET-6

Himalayas

Point out the following points in India map



- 68. Kulu valley (Himachal Pradesh)
- 69. Kangra Valley (Himachal Pradesh)
- 70. Mussori (Uttarakhand)
- 71. Raniket (Uttarakhand)
- 72. Nainital (Uttarakhand)
- 73. Capital city of Himachal Pradesh (Simla)
- 74. Pirpanjal Range
- 75. Mahabharata Range
- 76. Mishmi hills (Arunachal Pradesh)
- 77. Cachar (Assom)

- 78. Dehradun (Uttarakhand)
- 79. Patli Dun (Uttarakhand)
- 80. Kotli Dun (J&K)
- 81. The Patkai Bum
(Arunachal Pradesh)
- 82. Naga hills
- 83. Manipuri hills
- 84. The Jaintia (Meghalaya)
- 85. The Kasi hills (Meghalaya)
- 86. Mizo Hills



www.digitalsocialteacher.in



India - Relief Features

CHAPTER 1

WORK SHEET-7

Peninsular Plateau

Point out the following points in India map



87. The Indian Plateau (The Peninsular Plateau)
88. The North division of the Peninsular Plateau (Malwa Plateau-Central high lands)
89. The South division of the Peninsular Plateau(Deccan Plateau)
90. The Plateau Which is rich in minerals (Chotangapur)
91. The mountain range on the North of Narmada (Vindya)
92. The Northern boundary of Deccan Plateau (Satpura Range)
93. The mountain range on the south of Narmada (Satpura)
94. The Eastern boundary of Deccan Plateau (Eastern Ghats)
95. The Western boundary of Deccan Plateau(Western Ghats- Sahayadri)
96. The Southern boundary of Deccan Plateau(Nilagiri Hills)
97. The mountain range which is joint Eastern and Western Ghats(Nilagiri Hills)



www.digitalsocialteacher.in



India - Relief Features

CHAPTER 1

WORK SHEET-7

Peninsular Plateau

Point out the following points in India map



98. The Highest peak in Nilagiri Hills (Dodabetta)
99. The Highest peak in Western Ghats (Annaimudi)
100. The highest peak in Eastern Ghats (Aroya Konda)
101. The highest peak in South India (Annaimudi)
102. Ooty(Udakamandalam)
103. Kodaikenal
104. The place situated on the seas (Kanvakumari-tamilnadu)

105. The Cardamom Hills (Kerala)
106. Palani hills (Tamilnadu)
107. Annaimalai hills (Tamilnadu)
108. Rajamahall hills
109. Nallamalas (Andhra Pradesh)
110. Velikondas (Andhra Pradesh)
111. Palakondas (Andhra Pradesh)
112. Seshachala hills (Andhra Pradesh)



WORK SHEET-8

Thar Desert

Point out the following points in India map



113. The Great desert in India (Thar Desert)
114. The mountain range which is caused for Forming Thar Desert (Aravali Range)
115. The River flowing in Thar desert (Luni River)
116. Indira Gandhi Canal



WORK SHEET-8

Coastal Plains

Point out the following points in India map



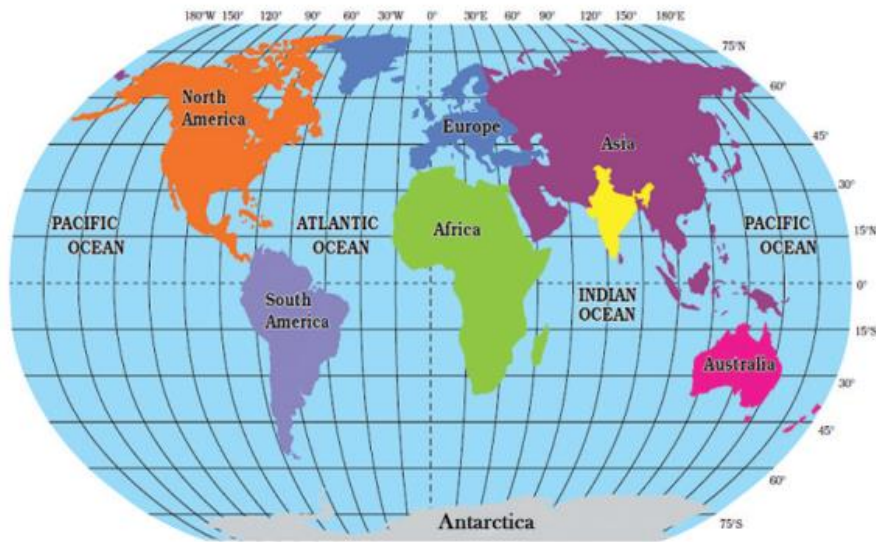
117. Konkan Coast (Maharashtra, Goa)
118. Canara Coast (Karnataka)
119. Malabar Coast (Kerala)
120. Coromandel Coast (Tamilnadu)
121. Sircar Coast (Andhra Pradesh)
122. Utkal Coast (Odisha)
123. Vanga Coast (West Bengal)
124. The lake in Odisha (Chilka)
125. The fresh water Lake in Andhra Pradesh (Kolleru)
126. The salt water Lake in Andhra Pradesh (Pulicat)



WORK SHEET-9

Map Reading

1. Read the following map and answer the below questions.



- i. India lies in which hemisphere According to Longitudes?
- ii. India lies in which hemisphere According to Latitudes?



www.digitalsocialteacher.in

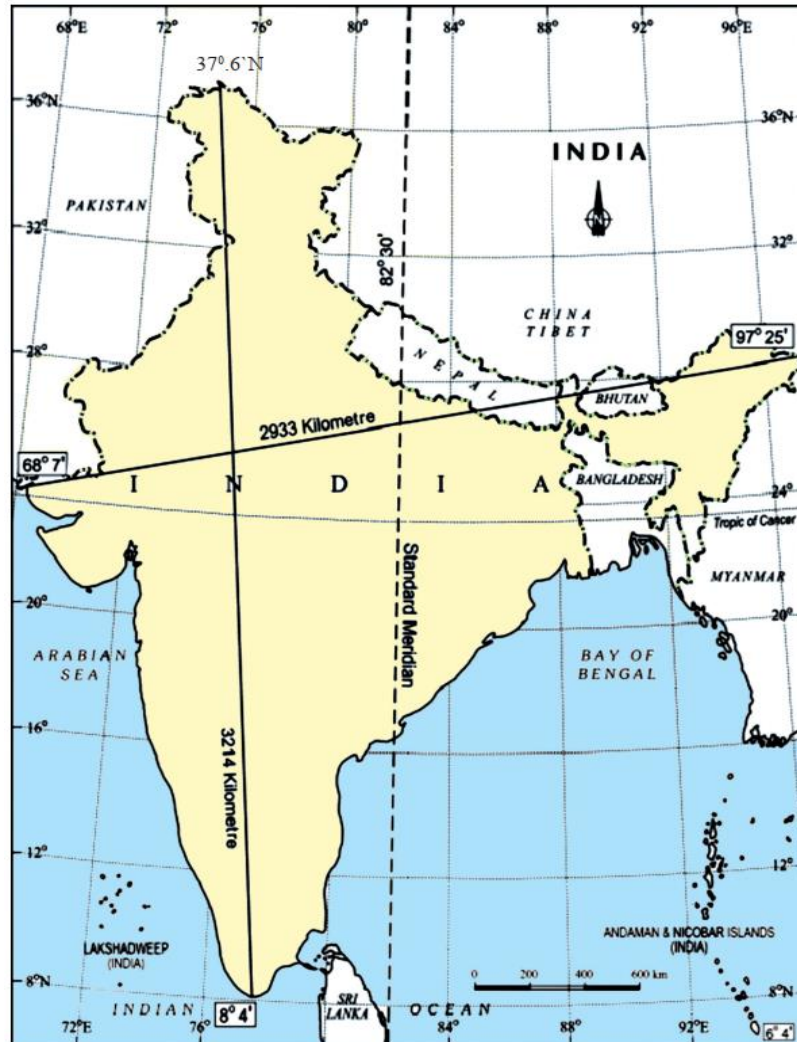


India - Relief Features

WORK SHEET-9

Map Reading

2. Read the following map and answer the below questions.



- i. Write any two boundary countries of India?
- ii. The South most latitude of India?
- iii. The East most longitude of India?
- iv. The West most longitude of India?
- v. Which is Indian Standard Meridian?
- vi. The length between east most point to west most point?



www.digitalsocialteacher.in

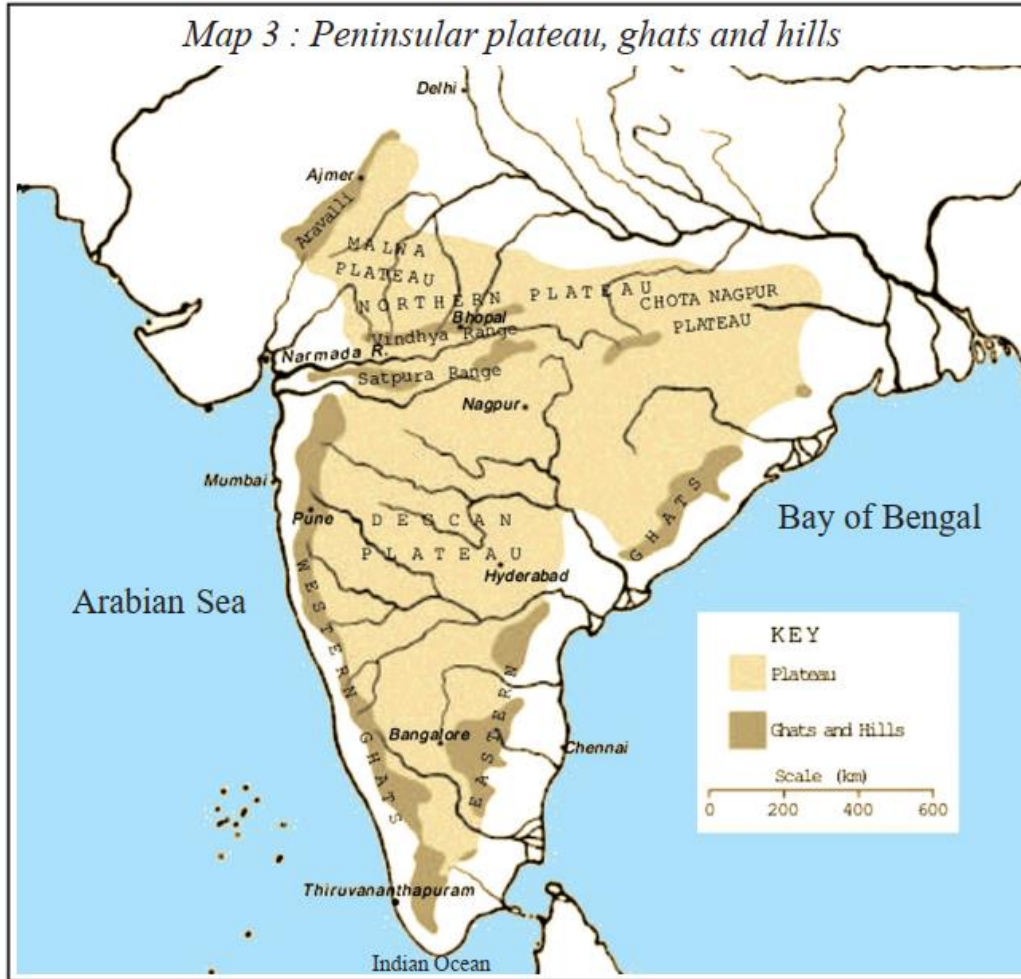


India - Relief Features

WORK SHEET-9

Map Reading

3. Read the following map and answer the below questions.



- i. Which river flows through rift valley?
- ii. Which plateau rich in minerals?
- iii. The southern boundary of Malwa plateau?
- iv. The mountain range which is situated in the North – West part of India?